

Name _____

Place Value

Represent a two-digit number as tens and ones.

Base Ten Blocks

Place Value

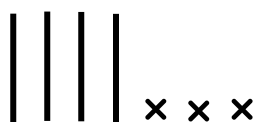
Number



$\begin{array}{r} 4 \quad 1 \\ \hline \text{tens} \quad \text{ones} \end{array}$



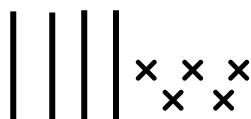
$\begin{array}{r} \quad \quad \\ \hline \text{tens} \quad \text{ones} \end{array}$



$\begin{array}{r} \quad \quad \\ \hline \text{tens} \quad \text{ones} \end{array}$



$\begin{array}{r} \quad \quad \\ \hline \text{tens} \quad \text{ones} \end{array}$



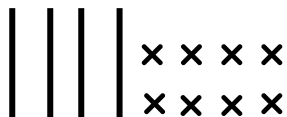
$\begin{array}{r} \quad \quad \\ \hline \text{tens} \quad \text{ones} \end{array}$



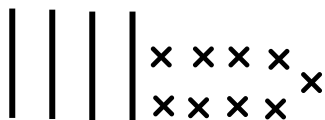
$\begin{array}{r} \quad \quad \\ \hline \text{tens} \quad \text{ones} \end{array}$



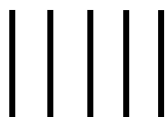
$\begin{array}{r} \quad \quad \\ \hline \text{tens} \quad \text{ones} \end{array}$



$\begin{array}{r} \quad \quad \\ \hline \text{tens} \quad \text{ones} \end{array}$



$\begin{array}{r} \quad \quad \\ \hline \text{tens} \quad \text{ones} \end{array}$



$\begin{array}{r} \quad \quad \\ \hline \text{tens} \quad \text{ones} \end{array}$