

Name _____

Place Value

Represent a two-digit number as tens and ones.

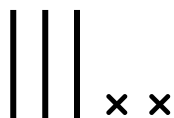
Base Ten Blocks

Place Value

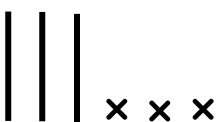
Number



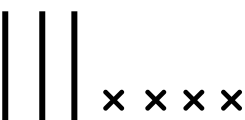
$\begin{array}{r} 3 \\ \hline \text{tens} \end{array} \quad \begin{array}{r} 1 \\ \hline \text{ones} \end{array}$



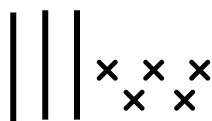
$\begin{array}{r} \\ \hline \text{tens} \end{array} \quad \begin{array}{r} \\ \hline \text{ones} \end{array}$



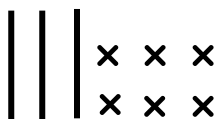
$\begin{array}{r} \\ \hline \text{tens} \end{array} \quad \begin{array}{r} \\ \hline \text{ones} \end{array}$



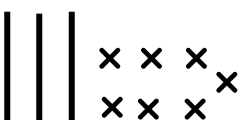
$\begin{array}{r} \\ \hline \text{tens} \end{array} \quad \begin{array}{r} \\ \hline \text{ones} \end{array}$



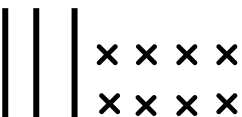
$\begin{array}{r} \\ \hline \text{tens} \end{array} \quad \begin{array}{r} \\ \hline \text{ones} \end{array}$



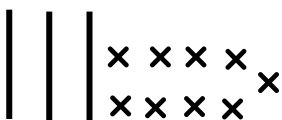
$\begin{array}{r} \\ \hline \text{tens} \end{array} \quad \begin{array}{r} \\ \hline \text{ones} \end{array}$



$\begin{array}{r} \\ \hline \text{tens} \end{array} \quad \begin{array}{r} \\ \hline \text{ones} \end{array}$



$\begin{array}{r} \\ \hline \text{tens} \end{array} \quad \begin{array}{r} \\ \hline \text{ones} \end{array}$



$\begin{array}{r} \\ \hline \text{tens} \end{array} \quad \begin{array}{r} \\ \hline \text{ones} \end{array}$



$\begin{array}{r} \\ \hline \text{tens} \end{array} \quad \begin{array}{r} \\ \hline \text{ones} \end{array}$