

Name _____

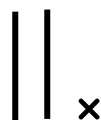
Place Value

Represent a two-digit number as tens and ones.

Base Ten Blocks

Place Value

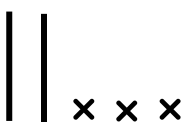
Number



$\frac{2}{\text{tens}}$ $\frac{1}{\text{ones}}$



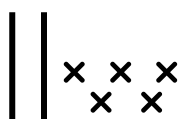
$\frac{\quad}{\text{tens}}$ $\frac{\quad}{\text{ones}}$



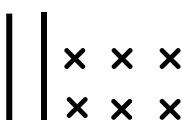
$\frac{\quad}{\text{tens}}$ $\frac{\quad}{\text{ones}}$



$\frac{\quad}{\text{tens}}$ $\frac{\quad}{\text{ones}}$



$\frac{2}{\text{tens}}$ $\frac{5}{\text{ones}}$



$\frac{\quad}{\text{tens}}$ $\frac{\quad}{\text{ones}}$



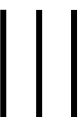
$\frac{\quad}{\text{tens}}$ $\frac{\quad}{\text{ones}}$



$\frac{\quad}{\text{tens}}$ $\frac{\quad}{\text{ones}}$



$\frac{\quad}{\text{tens}}$ $\frac{\quad}{\text{ones}}$



$\frac{3}{\text{tens}}$ $\frac{0}{\text{ones}}$